

Physics 42200

Waves & Oscillations

Lecture 13 – French, Chapter 5

Spring 2014 Semester

Matthew Jones

The Eigenvalue Problem

- If A is an $n \times n$ matrix and \vec{u} is a vector, find the numbers λ that satisfy

$$A \vec{u} = \lambda \vec{u}$$

- Re-write the equation this way:

$$(A - \lambda I) \vec{u} = 0$$

- This is true only if

$$\det(A - \lambda I) = 0$$

- For a 2×2 matrix, this is:

$$\begin{vmatrix} a - \lambda & b \\ c & d - \lambda \end{vmatrix} = (a - \lambda)(d - \lambda) - bc = 0$$

- This is a second order polynomial in λ . Use the quadratic formula to find the roots.

The Eigenvalue Problem

- The eigenvectors are vectors \vec{u}_i such that
$$(A - \lambda_i I)\vec{u}_i = 0$$
- There are n eigenvalues and n eigenvectors
- If \vec{u}_i is an eigenvector, then $\alpha\vec{u}_i$ is also an eigenvector.
- Sometimes it is convenient to choose the eigenvectors so that they have unit length:

$$\hat{u}_i \cdot \hat{u}_i = 1$$

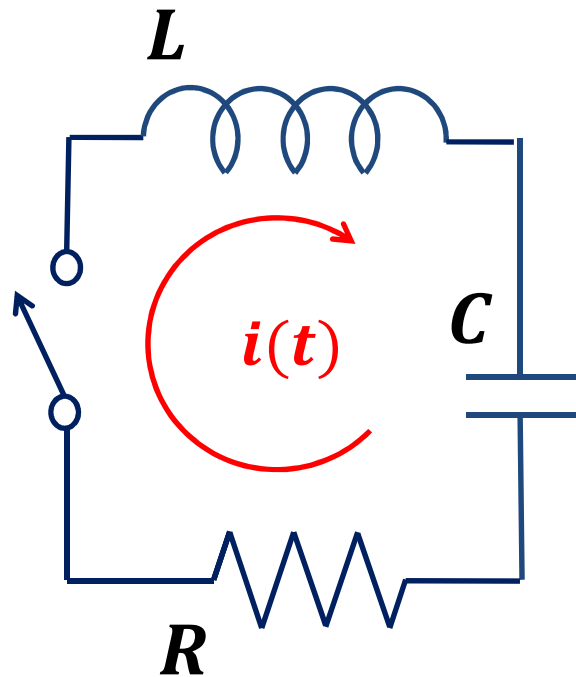
- Eigenvectors are orthogonal:

$$\vec{u}_i \cdot \vec{u}_j = 0 \text{ when } i \neq j$$

- An arbitrary vector \vec{v} can be written as a linear combination of the eigenvectors:

$$\vec{v} = a_1 \hat{u}_1 + a_2 \hat{u}_2 + \cdots$$

A Circuit with One Loop



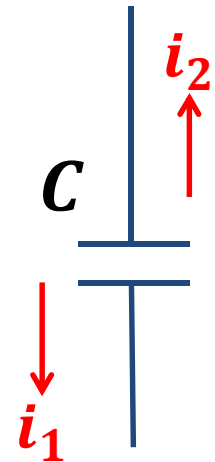
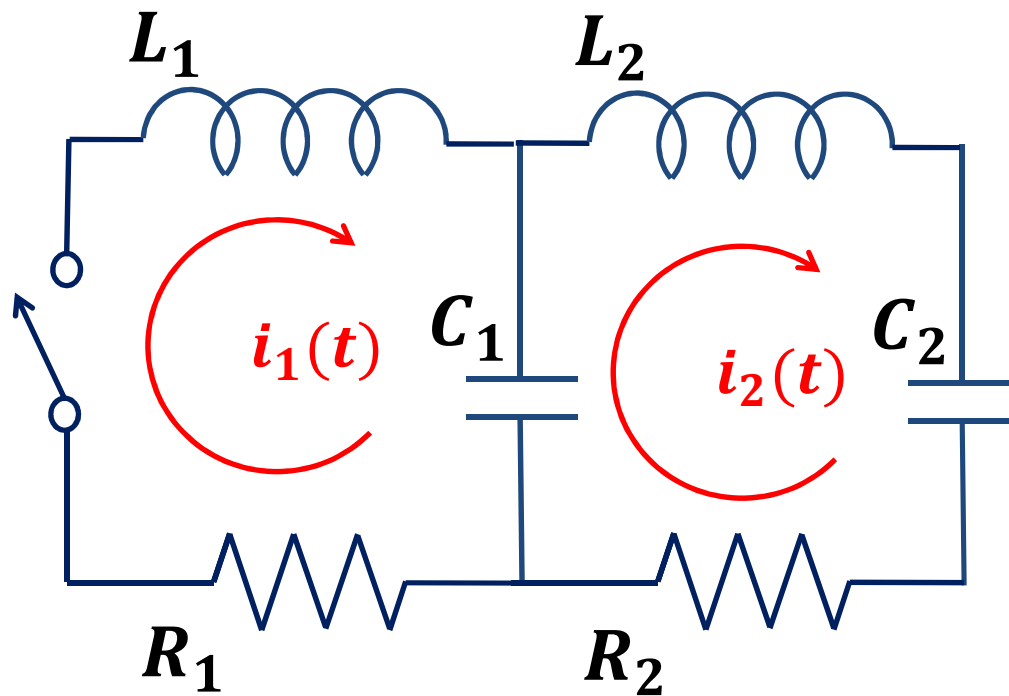
$$L \frac{d^2 i}{dt^2} + R \frac{di}{dt} + \frac{1}{C} i(t) = 0$$

$$\frac{d^2 i}{dt^2} + \gamma \frac{di}{dt} + (\omega_0)^2 i(t) = 0$$

A diagram of a capacitor labeled C with two parallel horizontal plates. A red arrow points downwards from the top plate to the bottom plate, labeled $i(t)$, representing the current flowing through the capacitor.

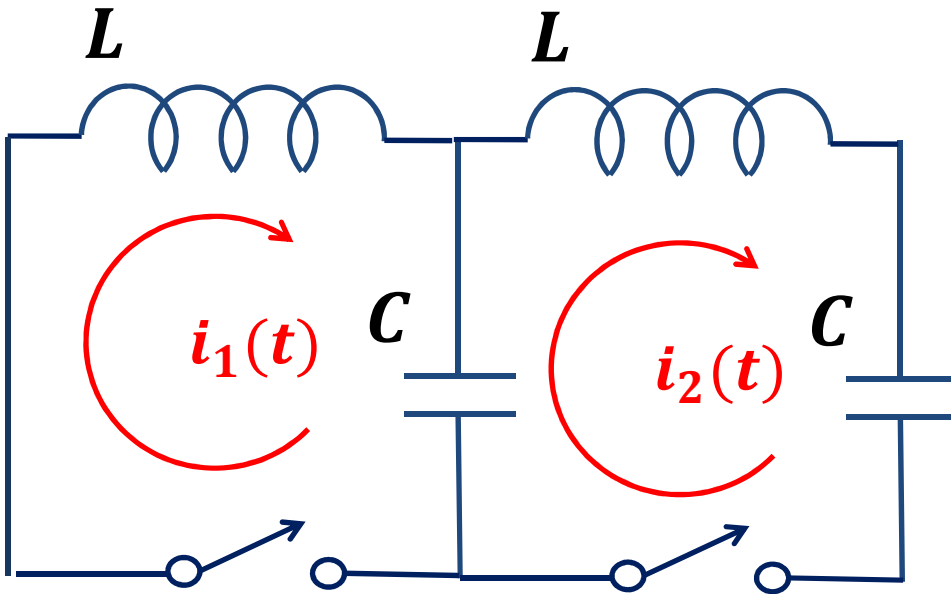
$$-\frac{1}{C} \int i(t) dt$$

A Circuit with Two Loops



$$-\frac{1}{C} \int (i_1 - i_2) dt$$

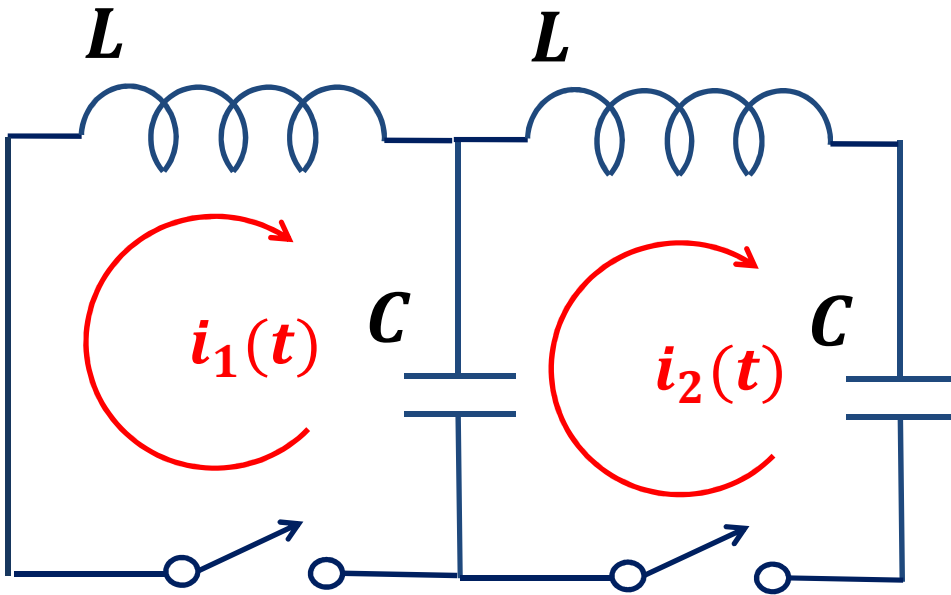
Example



$$-L \frac{di_1}{dt} - \frac{1}{C} \int (i_1 - i_2) dt = 0$$

$$-L \frac{di_2}{dt} - \frac{1}{C} \int i_2 dt - \frac{1}{C} \int (i_2 - i_1) dt = 0$$

Example



$$\frac{d^2 i_1}{dt^2} + (\omega_0)^2 (i_1 - i_2) = 0$$
$$\frac{d^2 i_2}{dt^2} + (\omega_0)^2 (2i_2 - i_1) = 0$$

Normal Modes of Oscillation

- What are the frequencies of the normal modes of oscillation?

- Let $\vec{l}(t) = \vec{l} \cos \omega t$

- Then $\frac{d^2 \vec{l}}{dt^2} = -\omega^2 \vec{l}(t)$

- Substitute into the pair of differential equations:

$$(-\omega^2 + (\omega_0)^2)i_1 - (\omega_0)^2 i_2 = 0$$

$$(-\omega^2 + 2(\omega_0)^2)i_2 - (\omega_0)^2 i_1 = 0$$

- Write it as a matrix:

$$\begin{pmatrix} (\omega_0)^2 - \omega^2 & -(\omega_0)^2 \\ -(\omega_0)^2 & 2(\omega_0)^2 - \omega^2 \end{pmatrix} \begin{pmatrix} i_1 \\ i_2 \end{pmatrix} = 0$$

Eigenvalue Problem

$$\begin{pmatrix} (\omega_0)^2 - \omega^2 & -(\omega_0)^2 \\ -(\omega_0)^2 & 2(\omega_0)^2 - \omega^2 \end{pmatrix} \begin{pmatrix} i_1 \\ i_2 \end{pmatrix} = 0$$

- For simplicity, let $\lambda = \omega^2$ and calculate the determinant:

$$\begin{vmatrix} (\omega_0)^2 - \lambda & -(\omega_0)^2 \\ -(\omega_0)^2 & 2(\omega_0)^2 - \lambda \end{vmatrix} = (\lambda - (\omega_0)^2)(\lambda - 2(\omega_0)^2) - (\omega_0)^4 \\ = \lambda^2 - 3\lambda(\omega_0)^2 + (\omega_0)^4 = 0$$

- Roots of the polynomial:

$$\lambda = \frac{3}{2}(\omega_0)^2 \pm \frac{1}{2}\sqrt{9(\omega_0)^4 - 4(\omega_0)^4} \\ \omega^2 = (\omega_0)^2 \left(\frac{3 \pm \sqrt{5}}{2} \right)$$

Eigenvalue Problem

- The eigenvectors are obtained by substituting in each eigenvalue.

- When $\omega^2 = (\omega_0)^2 \left(\frac{3+\sqrt{5}}{2} \right)$

$$\frac{(\omega_0)^2}{2} \begin{pmatrix} -1 - \sqrt{5} & -2 \\ -2 & 1 - \sqrt{5} \end{pmatrix} \begin{pmatrix} i_1 \\ i_2 \end{pmatrix} = 0$$

$$i_1 = \left(\frac{1 - \sqrt{5}}{2} \right) i_2$$

- First normal mode of oscillation:

$$\vec{q}_1 = \textcolor{red}{A} \begin{pmatrix} 1 - \sqrt{5} \\ 2 \end{pmatrix} \cos(\omega_1 t + \textcolor{red}{\alpha})$$

Eigenvalue Problem

- The eigenvectors are obtained by substituting in each eigenvalue.

- When $\omega^2 = (\omega_0)^2 \left(\frac{3-\sqrt{5}}{2} \right)$

$$\frac{(\omega_0)^2}{2} \begin{pmatrix} -1 + \sqrt{5} & -2 \\ -2 & 1 + \sqrt{5} \end{pmatrix} \begin{pmatrix} i_1 \\ i_2 \end{pmatrix} = 0$$

$$i_1 = \left(\frac{1 + \sqrt{5}}{2} \right) i_2$$

- Second normal mode of oscillation:

$$\vec{q}_2 = \mathbf{B} \begin{pmatrix} 1 + \sqrt{5} \\ 2 \end{pmatrix} \cos(\omega_2 t + \beta)$$

Eigenvalue Problem

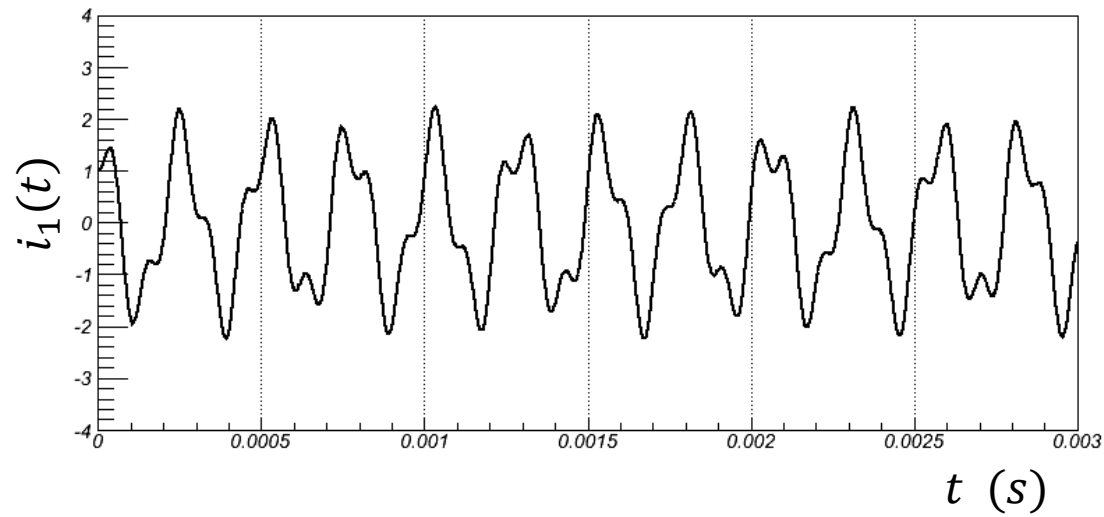
- The original “coordinates” are the sum of the normal modes of oscillation:

$$i_1(t) = A(1 - \sqrt{5}) \cos(\omega_1 t + \alpha) + B(1 + \sqrt{5}) \cos(\omega_2 t + \beta)$$

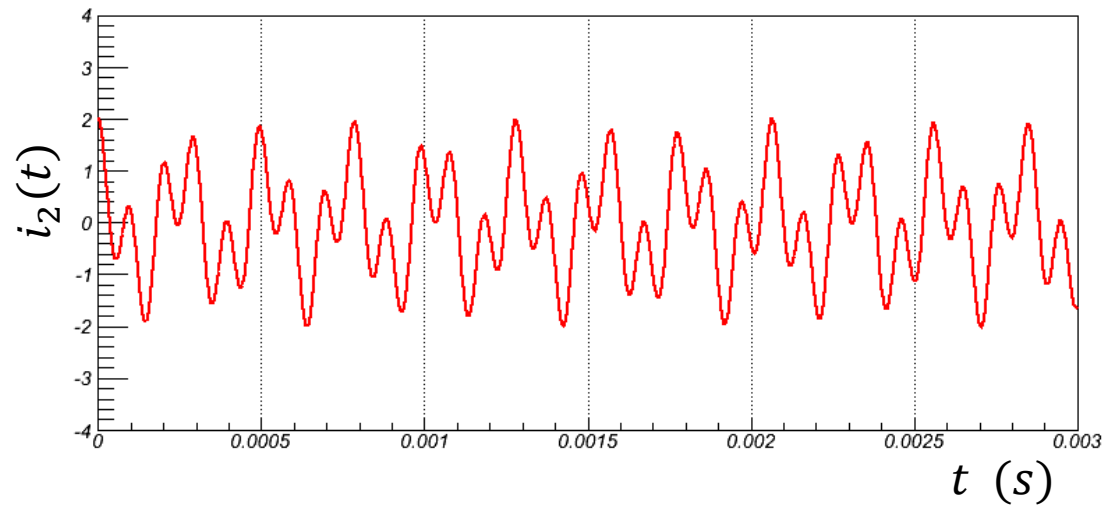
$$i_2(t) = 2A \cos(\omega_1 t + \alpha) + 2B \cos(\omega_2 t + \beta)$$

- The constants of integration can be chosen to satisfy the initial conditions
 - For example, suppose that $i_1(0) = i_0$ and $i_2(0) = 0$
 - Then $A = -B$, $2A = i_0 \rightarrow A = \frac{i_0}{2}$, $B = -\frac{i_0}{2}$

Two Loop Circuit

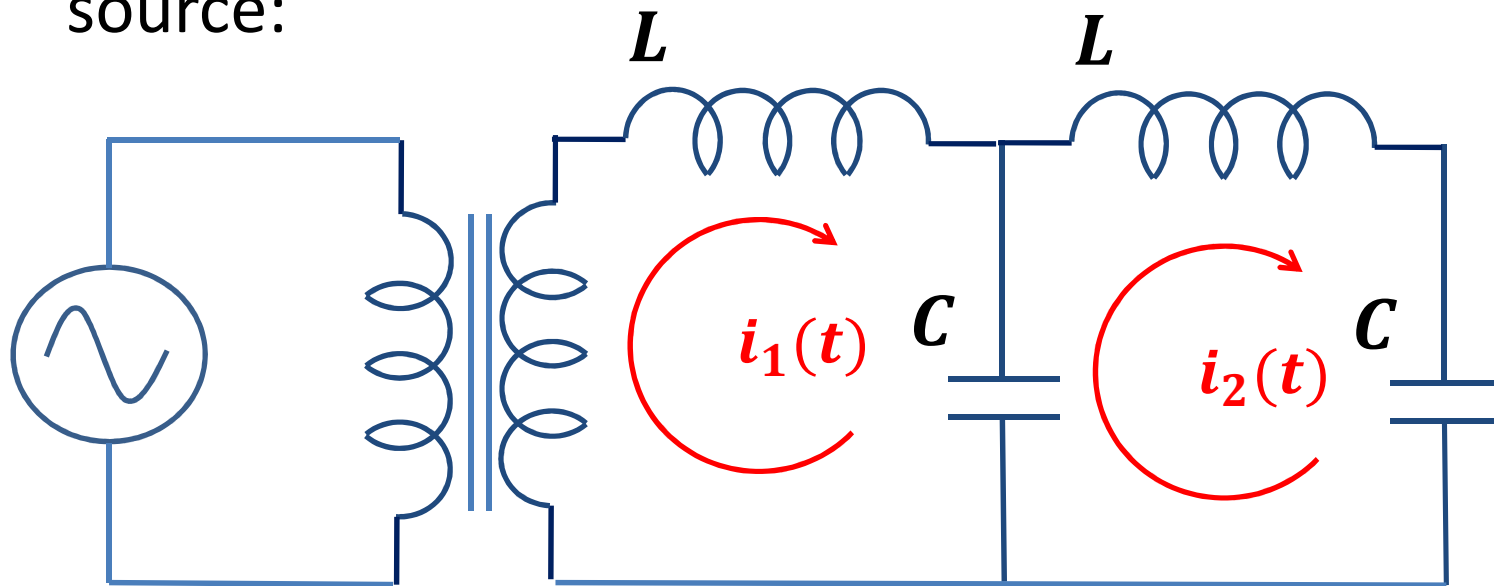


$$f_0 = \frac{\omega_0}{2\pi} = 1 \text{ kHz}$$
$$i_0 = 1 \text{ A}$$



Forced Coupled Circuit

- If the two loops were driven with a sinusoidal voltage source:

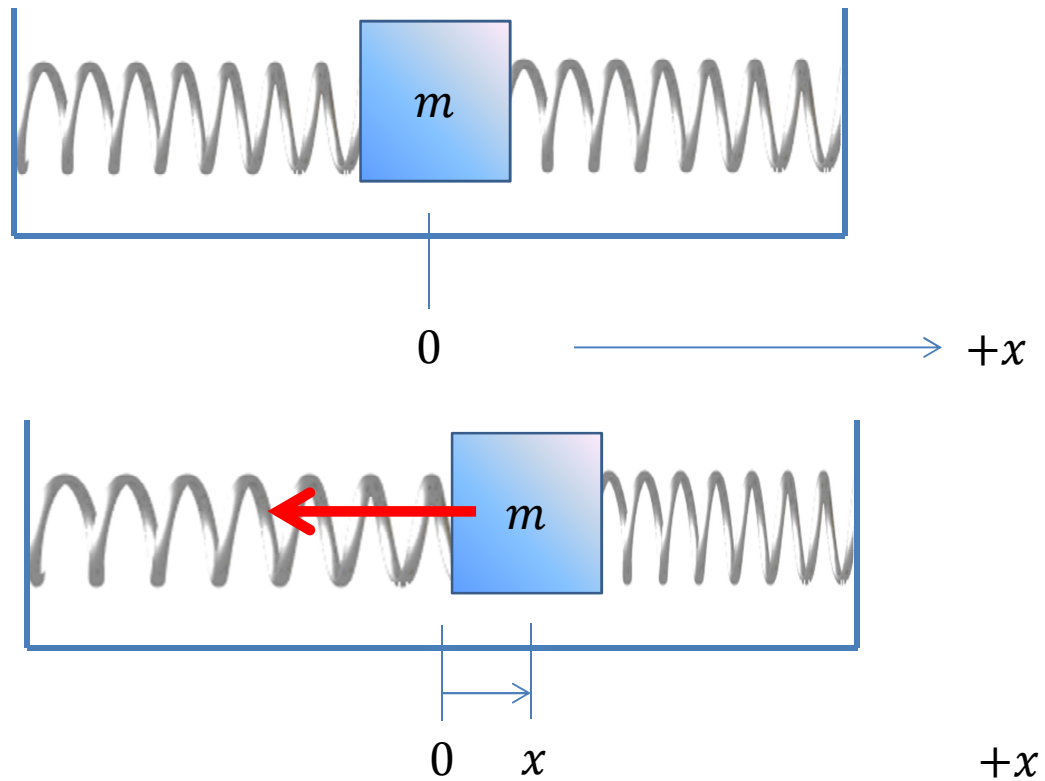


- Resonance would occur at the frequency of each normal mode:

$$\omega^2 = (\omega_0)^2 \left(\frac{3 \pm \sqrt{5}}{2} \right)$$

One Mass

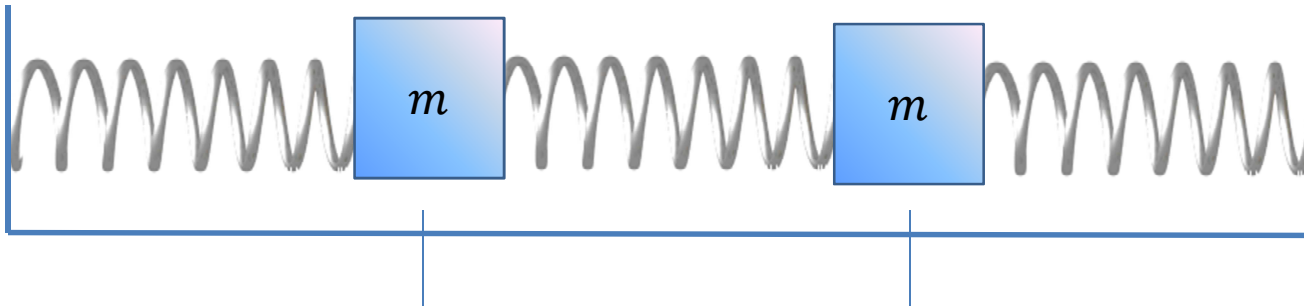
Consider one mass with two springs:



$$F = -2kx$$

Two Masses

Consider two masses with three springs:

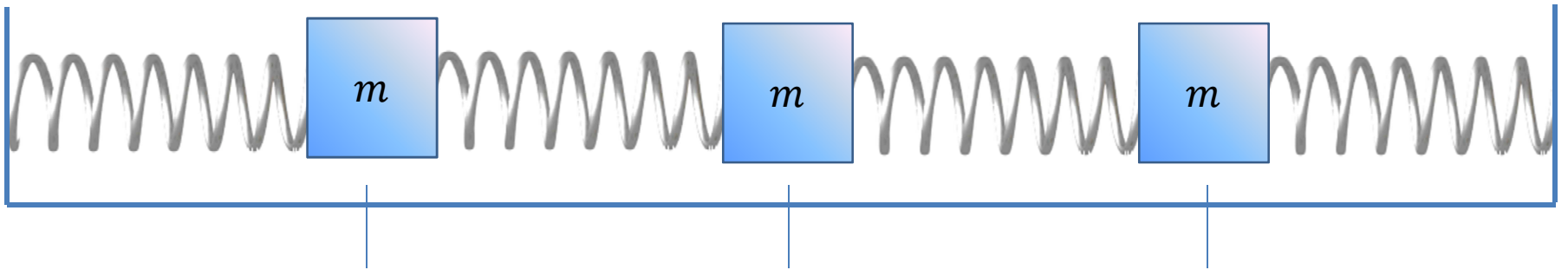


$$F_1 = -kx_1 - kx_1 + kx_2 = k(x_2 - 2x_1)$$

$$F_2 = kx_1 - kx_2 - kx_2 = k(x_1 - 2x_2)$$

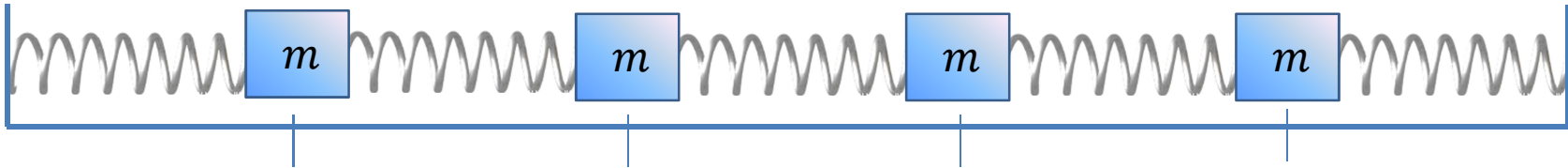
Three Masses

Consider three masses with four springs:



$$\begin{aligned}F_1 &= -kx_1 - kx_1 + kx_2 = k(x_2 - 2x_1) \\F_2 &= -k(x_2 - x_1) - k(x_2 - x_3) = k(x_1 - 2x_2 + x_3) \\F_3 &= -kx_3 - kx_3 + kx_2 = k(x_2 - 2x_3)\end{aligned}$$

Four Masses



$$F_1 = -kx_1 - kx_1 + kx_2 = k(x_2 - 2x_1)$$

$$F_2 = -k(x_2 - x_1) - k(x_2 - x_3) = k(x_1 - 2x_2 + x_3)$$

$$F_3 = -k(x_3 - x_2) - k(x_3 - x_4) = k(x_2 - 2x_3 + x_4)$$

$$F_4 = -kx_4 - kx_4 + kx_3 = k(x_3 - 2x_4)$$

- This pattern repeats for more and more masses.

- Except at the ends,

$$F_i = -k(x_i - x_{i-1}) - k(x_i - x_{i+1}) = k(x_{i-1} - 2x_i + x_{i+1})$$

- Equations of motion:

$$m \ddot{x}_i - k(x_{i-1} - 2x_i + x_{i+1}) = 0$$

Many Coupled Oscillators

$$m \ddot{x}_i - k(x_{i-1} - 2x_i + x_{i+1}) = 0$$

$$\ddot{x}_i + 2(\omega_0)^2 x_i - (\omega_0)^2 (x_{i-1} + x_{i+1}) = 0$$

- Apply the same techniques we used before:

- Suppose $x_i(t) = A_i \cos \omega t$

- Then $\ddot{x}_i(t) = -\omega^2 A_i \cos \omega t$

$$(-\omega^2 + 2(\omega_0)^2)A_i - (\omega_0)^2(A_{i-1} + A_{i+1}) = 0$$

$$\frac{A_{i-1} + A_{i+1}}{A_i} = \frac{-\omega^2 + 2(\omega_0)^2}{(\omega_0)^2}$$

- Guess at a solution:

$$A_n = C \sin(n\Delta\theta)$$

- Will this work?

Many Coupled Oscillators

$$\frac{A_{n-1} + A_{n+1}}{A_n} = \frac{-\omega^2 + 2(\omega_0)^2}{(\omega_0)^2}$$

- Proposed solution:

$$A_n = C \sin(n\Delta\theta)$$

- Boundary conditions: $A_0 = A_{N+1} = 0$
- This implies that $(N + 1)\Delta\theta = k\pi$

$$A_n = C \sin\left(\frac{nk\pi}{N + 1}\right)$$

$$\begin{aligned} A_{n-1} + A_{n+1} &= C \sin\left(\frac{(n-1)k\pi}{N+1}\right) + C \sin\left(\frac{(n+1)k\pi}{N+1}\right) \\ &= 2C \sin\left(\frac{nk\pi}{N+1}\right) \cos\left(\frac{k\pi}{N+1}\right) \end{aligned}$$

$$\frac{A_{n-1} + A_{n+1}}{A_n} = 2 \cos\left(\frac{k\pi}{N+1}\right) = \frac{-\omega^2 + 2(\omega_0)^2}{(\omega_0)^2}$$

Many Coupled Oscillators

$$\frac{A_{n-1} + A_{n+1}}{A_n} = 2 \cos \left(\frac{k\pi}{N+1} \right) = \frac{-\omega^2 + 2(\omega_0)^2}{(\omega_0)^2}$$

- Solve for ω :

$$\begin{aligned}\omega^2 &= 2(\omega_0)^2 \left(1 - \cos \left(\frac{k\pi}{N+1} \right) \right) \\ &= 4(\omega_0)^2 \sin^2 \left(\frac{k\pi}{2(N+1)} \right) \\ \omega_k &= 2\omega_0 \sin \left(\frac{k\pi}{2(N+1)} \right)\end{aligned}$$

- There are N possible frequencies of oscillation.

Many Coupled Oscillators

- The motion of the masses depends on both the position of the mass (n) and the mode number (k):

$$A_{n,k} = C_n \sin\left(\frac{nk\pi}{N+1}\right)$$

$$\omega_k = 2\omega_0 \sin\left(\frac{k\pi}{2(N+1)}\right)$$

- When all the particles oscillate in the k^{th} normal mode, the n^{th} particle's position is:

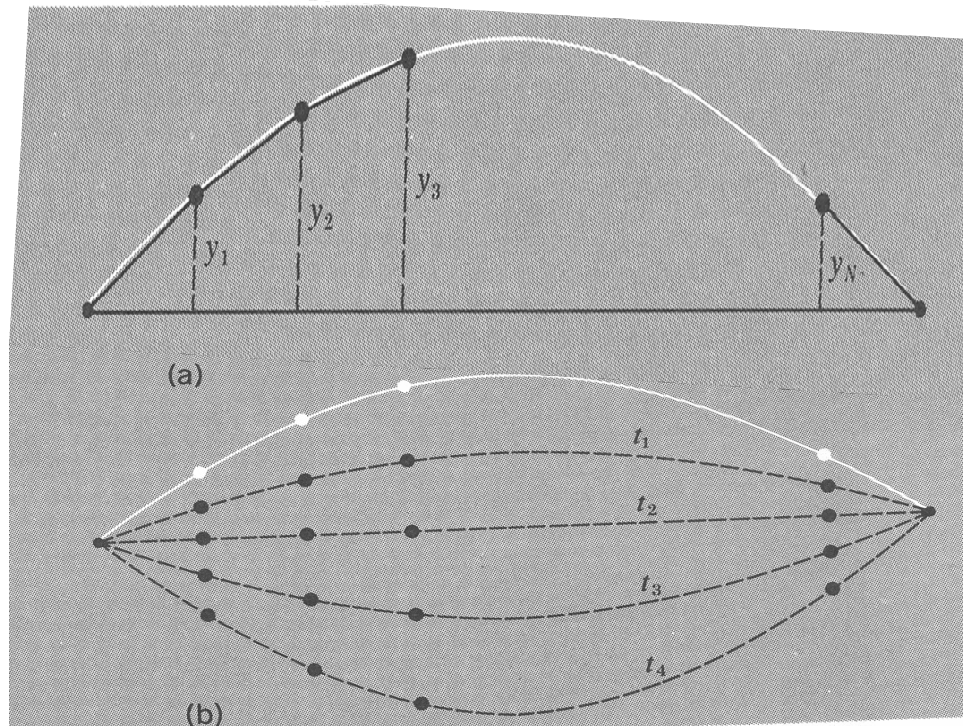
$$x_{n,k}(t) = A_{n,k} \cos(\omega_k t + \delta_k)$$

Many Coupled Oscillators

What do these modes look like?

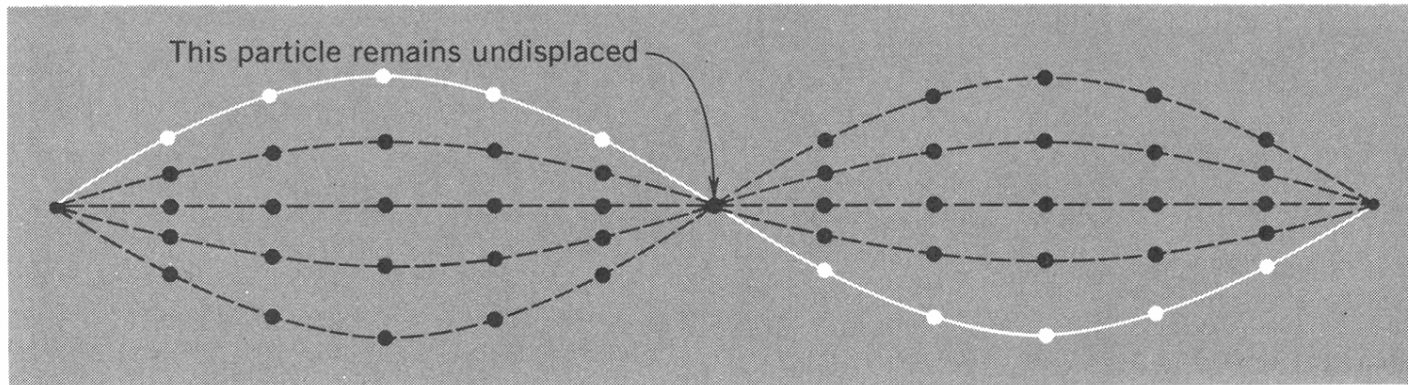
- Lowest order mode has $k = 1$...

$$x_{n,1}(t) = C_1 \sin\left(\frac{n\pi}{N+1}\right) \cos \omega_1 t$$



Many Coupled Oscillators

- Positions of masses in the second mode:



- Positions for 4 particles in modes $k = 1, 2, 3, 4$:

